



testpapers.co.za

basic education

Department:
Basic Education
REPUBLIC OF SOUTH AFRICA

**NATIONAL
SENIOR CERTIFICATE/
NASIONALE
SENIOR SERTIFIKAAT**

GRADE/GRAAD 10

**PHYSICAL SCIENCES: PHYSICS (P1)
FISIESE WETENSKAPPE: FISIKA (V1)**

NOVEMBER 2018

MARKING GUIDELINES/NASIENRIGLYNE

MARKS/PUNTE: 150

**These marking guidelines consist of 12 pages.
Hierdie nasienriglyne bestaan uit 12 bladsye.**

QUESTION 1/VRAAG 1

- 1.1 C✓✓
- 1.2 C✓✓
- 1.3 A✓✓
- 1.4 A✓✓
- 1.5 C✓✓
- 1.6 A✓✓
- 1.7 B✓✓
- 1.8 B✓✓
- 1.9 C✓✓
- 1.10 C/B✓✓

[20]

QUESTION 2/VRAAG 2

- 2.1 The difference in position (in space). ✓✓/Die verskil in posisie in ruimte.

OR/OF

The change in position (of an object.)✓✓/Die verandering in posisie van 'n voorwerp. (2)

- 2.2 12 m ✓west/wes✓ or/of -12 m ✓✓

IF/INDIEN

- 12 m West/Wes (Award 1 mark only/Ken 1 punt toe)

Accept/Aanvaar

12 m✓ left/links ✓ (2)

- 2.3
$$v = \frac{\Delta x}{\Delta t}$$
$$= \frac{5}{30} \checkmark$$
$$= 0,17 \text{ m}\cdot\text{s}^{-1} \checkmark \text{ west/wes } \checkmark$$

Accept/Aanvaar

0,17 m·s⁻¹✓ left/links ✓ (4)

2.4 **POSITIVE MARKING FROM 2.2 and 2.3/POSITIEWE NASIEN VANAF 2.2.en2.3**

$$\text{Speed} = \frac{\text{distance}}{\text{time}} / \text{Spoed} = \frac{\text{afstand}}{\text{tyd}}$$

$$(0,17)(2) \checkmark = 0,34 \text{ m}\cdot\text{s}^{-1}$$

$$0,34 \checkmark = \frac{12 \checkmark}{\Delta t}$$

$$\Delta t = 35,29 \text{ s} \checkmark$$

(4)
[12]

QUESTION 3/VRAAG 3

3.1 **Motion with uniform velocity:** Motion at constant velocity. ✓✓/ Motion with zero or no acceleration.

Beweging met uniforme snelheid: *Beweging teen konstante snelheid./ Beweging met nul of geen versnelling.*

Uniform accelerated motion: Motion with constant acceleration. ✓✓/ Velocity changes with the same amount during each time interval. ✓✓/ Motion during which the velocity changes with a constant amount per unit time. ✓✓/

Uniforme versnelde beweging: *Beweging met konstante versnelling/Snelheid verander met dieselfde hoeveelheid gedurende elke tydinterval/Beweging waartydens die snelheid met 'n konstante hoeveelheid per eenheid tyd verander.*

(4)

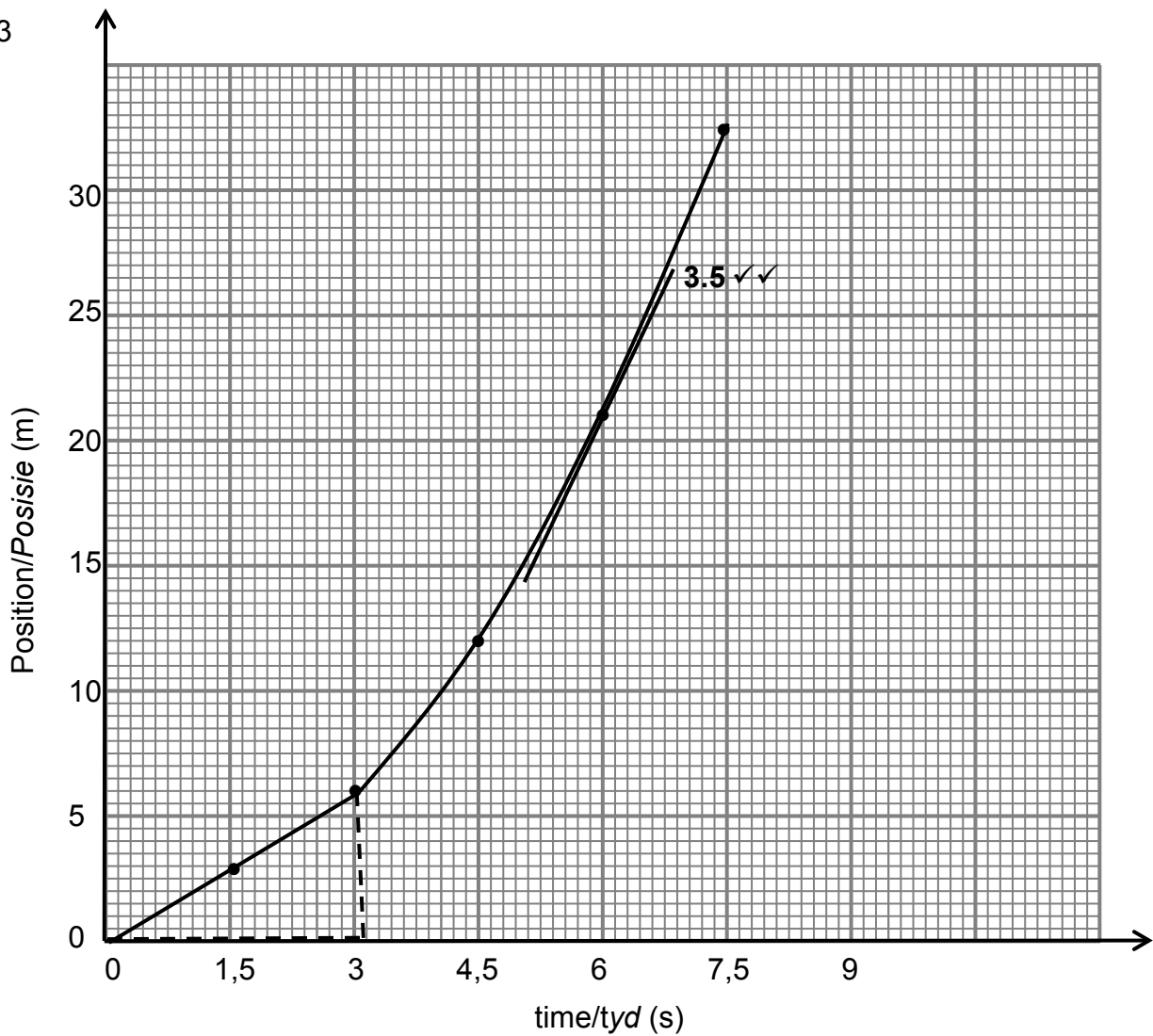
3.2.1 Motion with uniform velocity ✓/ *Beweging met uniforme snelheid*

(1)

3.2.2 Uniform accelerated motion ✓/ *Uniforme versnelde beweging*

(1)

3.3



MARKING GUIDELINES/NASIENRIGLYNE

- ✓ x-axis and units correctly labelled/x-as en eenhede korrek gemerk
- ✓ y-axis and units correctly labelled/y-as en eenhede korrek gemerk
- ✓ 2 points correctly plotted and joined/2 punte korrek gestip en verbind
- ✓ shape of the graph (0 – 3 s/vorm van die grafiek(0 – 3s) / straight line/reguitlyn
- ✓ shape of graph 3 – 7,5 s curved / vorm van grafiek 3 – 7,5 s kurwe / tangent /raaklyn

(5)

3.4 Instantaneous velocity: rate of change in position. ✓✓/Oombliklike snelheid: tempo van verandering in posisie.

OR/OF

Displacement divided by a very small time interval. ✓✓/Verplasing gedeel deur 'n baie klein tydinterval.

OR/OF

Velocity at a particular time. ✓✓/Snelheid op 'n spesifieke tyd.

(2)

3.5 Refer to the graph./Verwys na die grafiek.
(Tangent to the curve/ Raaklyn aan kurwe)

(2)

3.6
$$v = \frac{\Delta x}{\Delta t}$$
$$= \frac{6-0}{3-0} \checkmark$$
$$= 2 \text{ m}\cdot\text{s}^{-1} \checkmark \quad \text{right/regs } \checkmark$$

(4)

[19]

QUESTION 4/VRAAG 4

4.1 The rate of change of velocity. ✓✓/Die tempo van verandering van snelheid.

(2)

4.2.1
$$v_f = v_i + a\Delta t \checkmark$$
$$0 \checkmark = 15 + (-4,5)\Delta t \checkmark$$
$$\Delta t = 3,33 \text{ s } \checkmark$$

OR/OF

$$v_f = v_i + a\Delta t \checkmark$$
$$0 \checkmark = -15 + (4,5)\Delta t \checkmark$$
$$\Delta t = 3,33 \text{ s } \checkmark$$

(4)

4.2.2

OPTION 1/OPSIE 1

$$v_f^2 = v_i^2 + 2a\Delta x \checkmark$$
$$0^2 \checkmark = 15^2 + 2(-4,5)\Delta x \checkmark$$
$$\Delta x = 25 \text{ m } \checkmark$$

OPTION 2/OPSIE 2

POSITIVE MARKING FROM 4.2.1/POSITIEWE NASIEN VANAF 4.2.1

$$\Delta x = \left(\frac{v_f + v_i}{2} \right) \Delta t \checkmark$$
$$= \left(\frac{0 + 15}{2} \right) (3,33) \checkmark$$
$$= 24,98 \text{ m } \checkmark$$

OPTION 3/OPSIE 3

POSITIVE MARKING FROM 4.2.1/POSITIEWE NASIEN VANAF 4.2.1

$$\Delta x = v_i\Delta t + \frac{1}{2} a\Delta t^2 \checkmark$$
$$= (15)(3,33) \checkmark + \frac{1}{2} (-4,5)(3,33)^2 \checkmark$$
$$\Delta x = 25 \text{ m } \checkmark$$

(4)

4.3 **OPTION 1/OPSIE 1**

$$v_f^2 = v_i^2 + 2a\Delta x \checkmark$$
$$0^2 \checkmark = 30^2 + 2(-4,5)\Delta x \checkmark$$
$$\Delta x = 100 \text{ m} \checkmark$$

Car B \checkmark has a larger stopping distance (100 m > 25 m) \checkmark /Kar B het 'n groter stopafstand (100 m > 25 m).

OPTION 2/OPSIE 2

$$v_f = v_i + a\Delta t \checkmark$$
$$0 \checkmark = 30 + (-4,5)\Delta t \checkmark$$
$$\Delta t = 6,67 \text{ s} \checkmark$$

Car B \checkmark it takes longer to stop hence larger stopping distance \checkmark / Kar B dit neem langer om tot stilstand te kom dus 'n groter stopafstand

IF/INDIEN

Car B \checkmark it has a higher velocity than car A and therefore have a larger stopping distance at the same acceleration \checkmark Max: (2/6)
Kar B dit het 'n hoër snelheid as kar A en het dus 'n groter stopafstand met dieselfde versnelling Maks: (2/6)

(6)

4.4 The greater/larger the speed, the larger the stopping distance \checkmark if acceleration is constant. \checkmark /Hoe groter die spoed, hoe groter die stopafstand indien versnelling konstant is.

(2)

[18]

QUESTION 5/VRAAG 5

5.1 The energy an object has because of its position in the gravitational field \checkmark relative to some reference point. \checkmark /Die energie wat 'n voorwerp het as gevolg van die posisie daarvan in die gravitasieveld relatief tot 'n sekere verwysingspunt.

(2)

5.2 $E_p = mgh \checkmark$
 $= (65)(9,8)(4,5) \checkmark$
 $= 2\,866,5 \text{ J} \checkmark$

(3)

5.3 The net/total mechanical energy (sum of kinetic and gravitational potential energy) in an isolated/closed system \checkmark remains constant/ is conserved \checkmark /Die netto/totale meganiese energie in 'n geïsoleerde/geslote sisteem bly konstant/bly konstant.

(2)

5.4
$$\left. \begin{aligned} (E_p + E_k)_{\text{top/bo}} &= (E_p + E_k)_{\text{bottom/onder}} \\ mgh + 0 &= mgh + \frac{1}{2}mv^2 \end{aligned} \right\} \checkmark$$
$$(65)(9,8)(4,5) \checkmark = 0 + \frac{1}{2}(65)v^2 \checkmark$$
$$v = 9,39 \text{ m}\cdot\text{s}^{-1} \checkmark$$

OR/OF

$$\left. \begin{aligned} (E_p + E_k)_{\text{top/bo}} &= (E_p + E_k)_{\text{bottom/onder}} \\ mgh + 0 &= mgh + \frac{1}{2}mv^2 \end{aligned} \right\} \checkmark$$
$$2\,866,5 \checkmark = 0 + \frac{1}{2}(65)v^2 \checkmark$$
$$v = 9,39 \text{ m}\cdot\text{s}^{-1} \checkmark$$

(4)

5.5

OPTION 1/OPSIE 1

$$(E_p + E_k)_{top/bo} = (E_p + E_k)_{bottom/onder} \quad \checkmark$$

$$mgh + 0 = mgh + \frac{1}{2}mv^2 \quad \checkmark$$

$$(65)(9,8)h \quad \checkmark + 0 = 0 + \frac{1}{2} \times 65 \times (9,39)^2 \quad \checkmark$$

$$637 h = 2\,865,6$$

$$h = 4,49 \text{ m}$$

No✓/Nee. $h = 4,49 \text{ m} < 6 \text{ m}$ ✓

OPTION 2/OPSIE 2

$$E_{p \text{ at } Y} = mgh \quad \checkmark$$

$$= (65)(9,8)(6) \quad \checkmark$$

$$= 3\,822 \text{ J} \quad \checkmark$$

$E_{mech} < E_{p \text{ at } Y}$ ✓ therefore he will not reach point Y ✓ / $E_{meg} < E_p$ by Y *daarom sal hy nie punt Y bereik nie*

(5)
[16]

QUESTION 6/VRAAG 6

6.1

Difference/Verskil	Similarity/Ooreenkoms
Amplitudes✓	Wavelength✓/Golflengte Period/Tydperk Frequency/Frekwensie Transverse/Transversaal (Any one)/(Enige een)

(2)

6.2.1 A and/en B✓

OR/OF

C and/en D✓

OR/OF

B and/en C

OR/OF

A and/en D

(1)

6.2.2 15 (mm) ✓

(1)

6.3 The number of waves/wave pulses✓ passing a point per second.✓ /Die getal golwe/golfpulse wat per sekonde by 'n punt verby beweeg.

(2)

6.4.1

$$f = \frac{1}{T} \quad \checkmark$$

$$= \frac{1}{1,5} \quad \checkmark$$

$$= 0,67 \text{ Hz} \quad \checkmark$$

(3)

6.4.2

<p>POSITIVE MARKING FROM 6.4.1 POSITIEWE NASIEN VANAF 6.1 OPTION 1/OPSIE 1 $v = f\lambda$ ✓ $= (0,67)(0,1)$ ✓ $= 0,067 \text{ m}\cdot\text{s}^{-1}$ ✓</p>	<p>OPTION 2/OPSIE 2 $v = \frac{\Delta x}{\Delta t}$ or/of speed = $\frac{\text{distance}}{\text{time}}$ ✓ $= \frac{0,1}{1,5}$ ✓ $= 0,067 \text{ m}\cdot\text{s}^{-1}$</p>
---	---

(3)
[12]

QUESTION 7/VRAAG 7

7.1.1 What is the relationship between the speed of sound and temperature? ✓✓/
Wat is die verband tussen die spoed van klank en temperatuur?

OR/OF

How will the temperature affect the speed of sound? ✓✓/*Hoe sal die temperatuur die spoed van klank beïnvloed?*

OR/OF

What is the relationship between the time taken for the sound to travel and temperature? ✓✓/*Wat is die verband tussen die spoed van klank en temperatuur?*

(2)

Marking criteria/Nasienriglyne:	
Dependent and independent variables correctly identified. <i>Afhanklike en onafhanklike veranderlikes korrek geïdentifiseer.</i>	✓
Ask a question about the relationship between the independent and dependent variables./ <i>Vra 'n vraag oor die verwantskap tussen die afhanklike en onafhanklike veranderlikes.</i>	✓



7.1.2 Temperature ✓/*Temperatuur* (1)

7.1.3 Speed of sound ✓/Time taken for the sound to travel./*Spoed van klank/Tyd geneem vir die klank om te beweeg.* (1)

7.2 $v = \frac{\Delta x}{\Delta t}$ **or/of** speed = $\frac{\text{distance}}{\text{time}}$ ✓
 $= \frac{50}{0,146}$ ✓
 $= 342,47 \text{ m}\cdot\text{s}^{-1}$ ✓ (3)

7.3 The speed of sound increases / time taken for the sound to travel decreases / as the temperature increases. ✓✓/*Die spoed van klank neem toe / tyd geneem vir die klank om te beweeg neem af soos die temperatuur toeneem.* (2)

7.4 Echo ✓/*Eggo* (1)
[10]

QUESTION 8/VRAAG 8

8.1 Accelerating charges ✓/*Versnelde ladings* (1)

8.2 Gamma rays ✓/*Gammastrale* (1)

- 8.3 It has the highest frequency ✓ Energy is directly proportional to frequency ✓ /
 $E \propto f$ /
Dit het die hoogste frekwensie. Energie is direk eweredig aan die frekwensie/
 $E \propto f$ (2)

8.4.1	<p>OPTION 1/OPSIE 1</p> <p>$c = f\lambda$ ✓ $3 \times 10^8 = f(600 \times 10^{-10})$ ✓ $f = 5 \times 10^{15} \text{ Hz}$ ✓</p> <p>Ultraviolet ✓ / <i>Ultraviolet</i></p>	<p>OPTION 2/OPSIE 2</p> <p>$E = \frac{hc}{\lambda}$ $= \frac{(6,63 \times 10^{-34})(3 \times 10^8)}{600 \times 10^{-10}}$ ✓ $= 3,315 \times 10^{-18} \text{ J}$</p> <p>$E = hf$ $3,315 \times 10^{-18} = (6,63 \times 10^{-34})f$ $f = 5 \times 10^{15} \text{ Hz}$ ✓</p> <p>Ultraviolet ✓ / <i>Ultraviolet</i></p>
-------	--	--

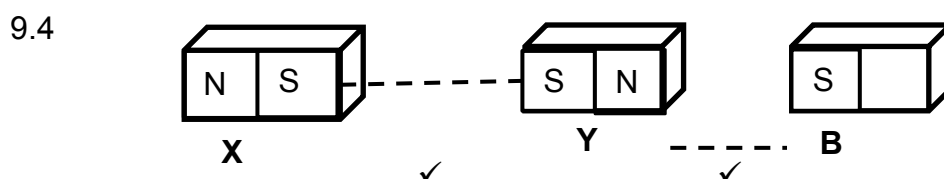
✓ Any one
Enige een

(4)

- 8.4.2 **POSITIVE MARKING FROM 8.4.1/POSITIEWE NASIEN VANAF 8.4.1**
 Sterilisation of medical equipment. ✓ / *Sterilisasie van mediese toerusting*
 Suntan beds / *Sonbeddens*
 Security in currency / *Veiligheid in valuta*
 Astronomy / *Astronomie*
(Any one/Any relevant use/Enige een/Enige relevante gebruik) (1)
[9]

QUESTION 9/VRAAG 9

- 9.1 Ferromagnetic (material) ✓ / *Ferromagneties (materiaal)* (1)
- 9.2 B ✓ (1)
- 9.3 South ✓ / *Suid* (1)

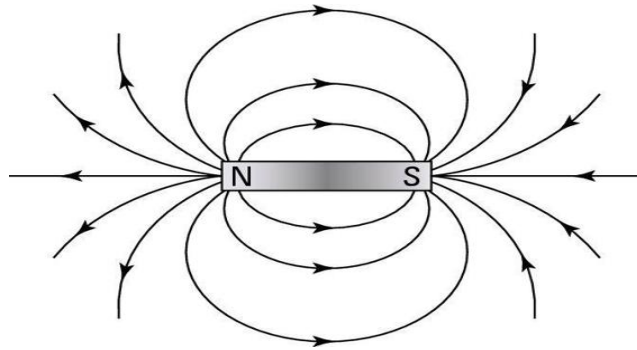


OR/OF

Magnets X repels Y / South pole ✓ / *Magneet X stoot Y af / Suidpool*

Magnet Y attracts B / South pole at B ✓ / *Magneet Y trek B aan / Suidpool by B* (2)

9.5



Marking criteria/Nasienkriteria	
Correct direction of field lines/Korrekte rigting van veldlyne	✓
Shape of the magnetic field/Vorm van die magneetveld	✓
No field lines crossing each other/Geen veldlyne kruis mekaar nie.	✓

(3)

9.6.1 Less than 5 cm ✓ / Minder as 5 cm

(1)

9.6.2 Magnitude of magnetic force is inversely proportional to the distance. ✓ B, is no longer attracting Y to the right ✓
 Grootte van magnetiese krag is omgekeerd eweredig aan die afstand. B, trek nie meer Y na regs aan nie

OR/OF

A decrease in distance increases the magnetic force. ✓ B, is no longer attracting Y to the right ✓
 'n Afname in afstand laat die magnetiese krag toeneem, B, trek nie meer Y na regs aan nie

(2)
[11]**QUESTION 10/VRAAG 10**

10.1 $n = \frac{Q}{e}$ ✓ or/of $\frac{Q}{q_e}$

$$30 = \frac{Q}{-1,6 \times 10^{-19}} \checkmark$$

$$Q = -4,8 \times 10^{-18} \text{ C} \checkmark$$

Accept/Aanvaar

$$n = \frac{Q}{e} \checkmark \text{ or/of } \frac{Q}{q_e}$$

$$30 = \frac{Q}{1,6 \times 10^{-19}} \checkmark$$

$$Q = 4,8 \times 10^{-18} \text{ C} \checkmark$$

(3)

10.2 Unlike/opposite charges ✓ attract ✓ / Ongelyksoortige/teenoorgestelde ladings trek mekaar aan.

(2)

- 10.3 The net/total charge in an isolated/closed system remains constant/is conserved ✓✓ Die netto/totale lading in 'n geïsoleerde/geslote sisteem bly konstant. (2)

NOTE/LET WEL:
 If any of the underlined words/phrases are omitted in the correct context: minus 1 mark.)
 Indien enige van die onderstreepte woorde/frases in die korrekte konteks weggelaat is: minus een punt.)

10.4 **POSITIVE MARKING FROM 10.1/POSITIEWE NASIEN VANAF 10.1**

$$\begin{aligned}
 Q_{\text{net/netto}} &= \frac{Q_1 + Q_2}{2} \checkmark \\
 &= \frac{4 \times 10^{-18} + (-4,8 \times 10^{-18})}{2} \checkmark \\
 &= -4 \times 10^{-19} \text{ C} \checkmark
 \end{aligned}$$

(4)
[11]

QUESTION 11/VRAAG 11

- 11.1.1 (a) $V_1 = 24 \text{ (V)}$ ✓ (1)
 (b) $A_1 = 0 \text{ (A)}$ ✓ (1)

<p>OPTION 1/OPSIE 1</p> $ \begin{aligned} \frac{1}{R_p} &= \frac{1}{R_1} + \frac{1}{R_2} \checkmark \\ &= \frac{1}{8} + \frac{1}{8} \checkmark \\ R_p &= 4 \Omega \end{aligned} $ $ \begin{aligned} R_T &= R_s + R_p \\ &= 8 + 4 \checkmark \\ &= 12 \Omega \checkmark \end{aligned} $	<p>OPTION 2/OPSIE 2</p> $ \begin{aligned} R_p &= \frac{\text{product / produk}}{\text{sum / som}} \checkmark \\ &= \frac{(8)(8)}{8 + 8} \checkmark \\ &= 4 \Omega \end{aligned} $ $ \begin{aligned} R_T &= R_s + R_p \\ &= 8 + 4 \checkmark \\ &= 12 \Omega \checkmark \end{aligned} $
---	---

(4)

11.1.3 **OPTION 1/OPSIE 1**
V divides in a ratio 8 : 4 ✓ (series)/V verdeel in 'n verhouding 8 : 4 (serie)
 $V_2 = \frac{8}{12} \times 24$ ✓ or/of $V_2 = \frac{2}{3} \times 24$
= 16 V ✓

OPTION2 / OPSIE 2
POSITIVE MARKING FROM 11.1.2/POSITIEWE NASIEN VANAF 11.2.1
V = IR
24 = I(12)
I = 2 A
V = IR ✓
= (2)(8) ✓
= 16 V ✓

(3)

11.1.4 $A_2 = A_3 \cdot \checkmark$

(1)

11.2.1 Resistance is directly proportional to the length of the conducting wire. ✓/
Weerstand is direk eweredig aan die lengte van die geleidingsdraad.

OR/OF

As the length of the wire increases, the resistance increases./Soos die lengte van die geleidingsdraad toeneem, neem die weerstand toe

(1)

11.2.2 $1,35 \Omega \checkmark$ (Range/Variasiewydte: $1,3 \Omega$ to/tot $1,4 \Omega$)

(1)

[12]

TOTAL/TOTAAL: 150